

Name:  
Grade:

Date:

## Measuring Angles

1)



\_\_\_\_\_

2)



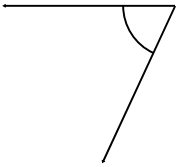
\_\_\_\_\_

3)



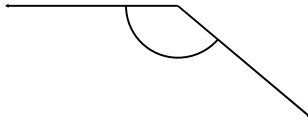
\_\_\_\_\_

4)




\_\_\_\_\_

5)



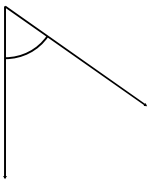
\_\_\_\_\_

6)



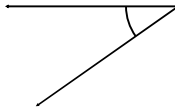
\_\_\_\_\_

7)



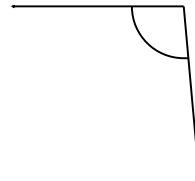
\_\_\_\_\_

8)



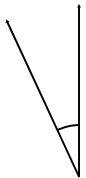
\_\_\_\_\_

9)



\_\_\_\_\_

10)



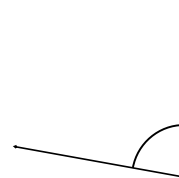
\_\_\_\_\_

11)



\_\_\_\_\_

12)



\_\_\_\_\_