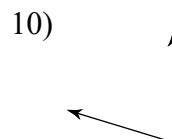
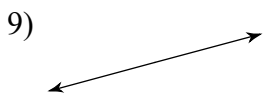
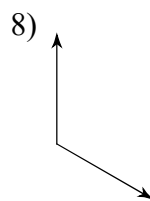
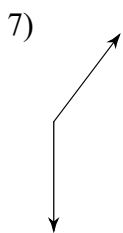
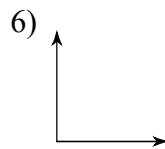
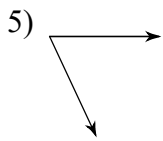
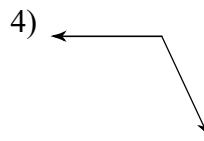
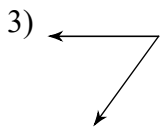
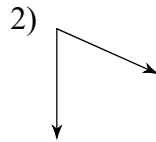
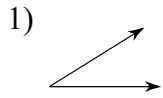


**Classify the given angles**



Answers to

- 1) acute
- 5) acute
- 9) straight

- 2) acute
- 6) right
- 10) acute

- 3) acute
- 7) obtuse

- 4) obtuse
- 8) obtuse