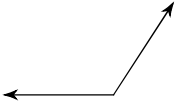


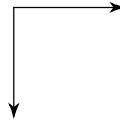
## Identify and choose the correct angles

1)



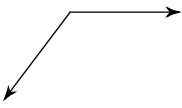
- A) obtuse      B) right  
C) straight    D) acute

2)



- A) obtuse      B) acute  
C) straight    D) right

3)



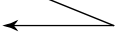
- A) obtuse      B) acute  
C) straight    D) right

4)



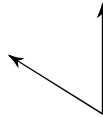
- A) acute        B) right  
C) straight    D) obtuse

5)



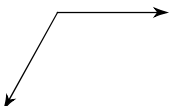
- A) right        B) straight  
C) acute        D) obtuse

6)




- A) straight    B) right  
C) obtuse     D) acute

7)



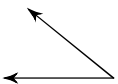
- A) right        B) obtuse  
C) acute        D) straight

8)



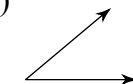
- A) straight    B) obtuse  
C) right        D) acute

9)



- A) right        B) straight  
C) obtuse      D) acute

10)



- A) obtuse      B) acute  
C) straight    D) right

Answers to

1) A  
5) C  
9) D

2) D  
6) D  
10) B

3) A  
7) B

4) C  
8) B